













(section)



(name)




### Chapter 2 Quiz



A. Fill in the blanks.




	Beat and meter type	Beat value	Division of the Beat	Time signature
1.	Compound duple			$\frac{6}{8}$
2.	Simple quadruple			$\frac{4}{4}$
3.	Simple triple			$\frac{3}{4}$
4.	Simple duple			$\frac{2}{2}$
5.	<u>Simple</u> triple			$\frac{3}{2}$
6.	Compound <u>triple</u>			$\frac{9}{8}$


B. Each measure below is incomplete. Add one or more rests to complete the measure.

1.  $\frac{3}{4}$     $\frac{7}{4}$  {





2.  $\frac{4}{4}$     =



3.  $\frac{9}{8}$   {  }




4.  $\frac{6}{8}$      $\frac{7}{8}$




5.  $\frac{2}{2}$   }




C. Provide the best time signature for each measure. In some cases more than one answer may be possible.

1.  $\frac{3}{4}$  |     |

2.  $\frac{3}{2}$  |   |

3.  $\frac{6}{8}$  |    |

4.  $\frac{3}{4}$  |    |

5.  $\frac{6}{8}$  |    |